

2nd Semester Final-Arts and Humanities 11th Grade


Mark your answers on the gradecam sheet with a #2 pencil. Mark answer very black.

Multiple Choice


Choose the best answer.

1. What are the two categories of shapes that we have studied?
 - A. square and oval shapes
 - B. parallelograms and geometric shapes
 - C. stars and stripes
 - D. organic and geometric shapes
2. What is the critical vocabulary word that means one color or a limited range of colors?
 - A. polychromatic
 - B. warm colors
 - C. monochromatic
 - D. secondary colors
3. When mixed, what primary colors create the secondary color purple?
 - A. red & green
 - B. red & yellow
 - C. yellow & blue
 - D. red & blue
4. Warm colors tend to _____ into space and cool colors tend to _____ to create depth.
 - A. move, stay still
 - B. advance, recede
 - C. recede, advance
 - D. none of the above
5. What element of art means how something feels or appears to feel; the surface quality of an object?
 - A. texture
 - B. line
 - C. shape
 - D. color
6. The visual art element that denotes lightness and darkness of a shape or color in a painting:
 - A. form
 - B. intensity
 - C. color
 - D. value

7. Which area in the image below shows the area of emphasis?
- A. Area 1
 - B. Area 2
 - C. Area 3
 - D. Area 4



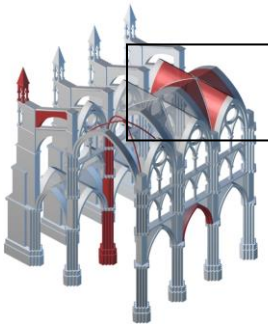
8. This occurs when the elements of visual art and the principles of design work together:
- A. balance
 - B. repetition
 - C. contrast
 - D. unity
9. The principle of design that means a sense of movement achieved by the repetition of visual elements:
- A. rhythm
 - B. value
 - C. movement
 - D. repetition
10. Looking at the image below of Thomas Jefferson's home, *Monticello*, what type of balance is present within the structure itself?



- A. Asymmetrical
 - B. Aerial
 - C. Radial
 - D. Symmetrical
11. A progression of single notes and is usually the part of the song you remember is called?
- A. Verse
 - B. None of these
 - C. Bridge
 - C. Chorus

12. Contrast can be created by using _____.
- A. smooth and rough surfaces
 - B. large and small shapes
 - C. plain areas against areas of patterns
 - D. all of the above
13. Which of the following is NOT an element of music?
- A. Pattern
 - B. Harmony
 - C. Timbre
 - D. Dynamics
14. Which element of music refers to two or more notes/tones sounding together?
- A. Timbre
 - B. Dynamics
 - C. Tempo
 - D. Harmony
15. _____ is the highness or lowness of a tone.
- A. Dynamics
 - B. Tempo
 - C. Pitch
 - D. Harmony
16. Which of the following is NOT a form of music that we have studied?
- A. concert
 - B. theme & variations
 - C. rondo
 - D. symphony
17. In music, this signals a gradual increase or decrease in sound:
- A. crescendo/decrescendo
 - B. meter
 - C. fermata
 - D. rhythm
18. _____ is the sound quality of music; also known as tone color.
- A. pitch
 - B. line
 - C. timbre
 - D. tempo
19. Which of the following is NOT a stage design?
- A. denouement
 - B. thrust
 - C. proscenium
 - D. arena


20. What is known as the main character that is usually the good guy?
- A. antagonist
 - B. protagonist
 - C. Homer Simpson
 - D. cast
21. _____ is the onstage decoration that helps establish the time and place of a play.
- A. audience
 - B. scenery
 - C. time
 - D. lights
22. Which style of theater refers to a serious drama that typically describing a conflict between the main character and a superior force?
- A. melodrama
 - B. satire
 - C. tragedy
 - D. comedy
23. Of the following, what vocabulary word does NOT belong to part of the plot structure in theatre?
- A. rising action
 - B. falling action
 - C. turning point
 - D. theme
24. What is the temple dedicated to Athena, built completely out of marble and considered to be a “perfect” structure that is located in Athens, Greece?
- A. Parthenon
 - B. Statue of Liberty
 - C. Dome of the Rock
 - D. stupa
25. What structural element is being displayed in the image below?



- A. dome
- B. arch
- C. column
- D. vault

26. This English landscape painter spent most of his time painting the surroundings around his home town. His paintings, for the most part, always included cloudy skies.
- A. Van Gogh
 - B. Goya
 - C. David
 - D. Constable
27. The word “Renaissance” basically translates to _____ in English.
- A. death
 - B. life
 - C. birth
 - D. re-birth
28. Which of the following list consists only of famous Renaissance artists?
- A. Donatello, Picasso, Ghiberti
 - B. Raphael, Donatello, Da Vinci, Michelangelo
 - C. Van Gogh, Dali, Raphael, Da Vinci
 - D. Francesca, Raphael, Matisse, Chopin
29. This artist developed the painting technique of Sfumato and was very interested in the studies of science and math.
- A. Francesca
 - B. Raphael
 - C. Leonardo Da Vinci
 - D. Michelangelo
30. Painter, sculptor and architect – however he primarily considered himself a sculptor. Famous works include: David, Pieta and the ceiling of the Sistine Chapel.
- A. Leonardo Da Vinci
 - B. Michelangelo
 - C. Francesca
 - D. Raphael
31. Which sentence best describes Francisco Goya?
- A. English landscape painter of the 19th Century.
 - B. French painter of the revolution. His most famous work is *Liberty Leading the People*.
 - C. Spanish painter of the 19th Century, his works at the time were very controversial.
 - D. Spanish painter of the Romantic period. His most famous paintings are *The Third of May* and *Saturn Devouring His Children*.
32. Michelangelo’s ceiling of the Sistine Chapel was done with which type of paint/painting technique.
- A. tempera
 - B. fresco
 - C. oil paint
 - D. watercolor

33. All of the perspective lines in *The Last Supper* (below) go to which point?



Match the artist with his painting...

a. Caravaggio

b. David



34. *The Calling of St. Matthew*



35. *The Oath of the Horatti*



36. *Doubting Thomas*



37. *The Death of Socrates*

Match the artist/architect with his work...

a. Rembrandt

b. Thomas Jefferson

c. Constable

d. Da Vinci

38. *Mona Lisa*



39. *The Anatomy Lesson of Dr. Tulp*



40. *Dedham Vale*



41. *Monticello*



Match the artist/architect with his work...


- a. Rembrandt
- b. Thomas Jefferson
- c. Constable
- d. Da Vinci



42. *University of Virginia*



43. *The Hay Wain*



44. *The Last Supper*



45. *Journal Pg*


Match the artist/architect with his or her work...

- A. Monet
- B. Van Gogh
- C. Cassatt
- D. Degas
- E. Seurat


46. *Mother and Child*



47. *La Catedral De Auvers Sur Oise*



48. *The Eiffel Tower*



49. *Four Ballerinas on Stage*



50. *Water Lily Pond Symphony in Rose 1*

